

This sign pictured below means:



- a. Yield right of way
- b. Railroad crossing
- c. Stop

This sign pictured below means:



- a. Merging traffic
- b. Four lane ahead
- c. Two-way travel reminder

This sign pictured below means:



- a. Sharp turn to the right, then sharp turn to the left
- b. Winding road
- c. Intersection to the right, then intersection to the left

This sign pictured below means:



- a. side road enters highway ahead at an angle
- b. exit ramp to a freeway
- c. another road crosses the highway ahead

The diagram below shows the driver of a car signaling to make a:



- a. Right turn
- b. Left turn
- c. Stop

This sign pictured below means:



- a. gradual curve to the right then curve to the left
- b. winding road
- c. sharp turn to the right

This sign pictured below means:



- a. The street has no outlets
- b. Pavement ends
- c. Reminder to merge into adjacent lane

This sign pictured below means:



- a. You must not drive to the left of this sign
- b. You must not drive to the right of this sign
- c. You are entering a one-way street

This sign pictured below means:



- a. Slippery when wet
- b. Divided highway ends
- c. Winding road ahead

The diagram below shows the driver of a car signaling to make a:



- a. Left turn
- b. Right turn
- c. Stop or slow down

This sign pictured below means:



- a. construction area
- b. slow moving vehicle
- c. warning

This sign pictured below means:



- a. There is a stop sign ahead
- b. there is a red light ahead
- c. there is a yield sign ahead

This sign pictured below means:



- a. stop
- b. you must yield right of way
- c. warning

This sign pictured below means:



- a. there is a railroad crossing ahead. Slow down and be prepared to stop
- b. There is a cross road head
- c. You are approaching an intersection. Reduce speed and be prepared to stop

This sign pictured below means:



- a. stop
- b. warning
- c. railroad warning

This sign pictured below means



- a. yield ahead
- b. slow moving vehicle
- c. no passing zone

This sign pictured below means:



- a. There is a traffic signal ahead
- b. There is a stop sign ahead
- c. There is a yield ahead

This sign pictured below means:



- a. Road ahead is slippery when wet, slow down
- b. Road ahead is slippery; all the time, slow down
- c. You must not drive on the highway when it is wet

This sign pictured below means:



- a. side road enters
- b. Number of highway lanes ahead change
- c. Detour

This sign pictured below means:



- a. You must yield to pedestrians
- b. You must yield to school children in the crosswalk
- c. Flagman ahead, yield and slow down

This sign pictured below means:




- a. You are reminded you are on a two-way road
- b. You are reminded to reduce your speed
- c. You will be merging with other traffic travelling in the same direction

This sign pictured below means:



- a. Slow down, clip in the road
- b. Narrow bridge ahead
- c. The road ahead angles to the inside, slow your speed

This sign pictured below means:



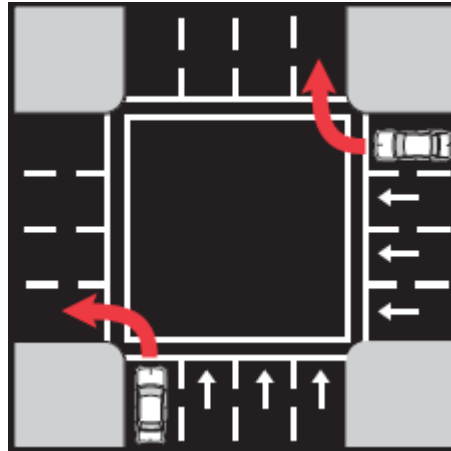
- a. No passing zone
- b. Yield right of way
- c. Construction

This sign pictured below means:




- a. You must not make a left turn at this intersection
- b. You must not make a U-turn
- c. You must turn left

The diagram below shows vehicle #1 and #2 making a proper turn. One of the following answers is correct:



- a. Vehicle #1 is turning from a one-way street to a two-way street
- b. Vehicle #2 is turning from a one-way to a one-way street
- c. Vehicle #1 is turning from a two-way to a one-way street

The diagram below indicates a car entering the freeway. Which one of the procedures should he follow?



- a. Increase his speed in the acceleration lane to match that of other vehicles in thru lanes.
- b. Move slowly into the lane of traffic
- c. Immediately drive into the traffic lane, as other traffic will move over for him

The two-second rule applies:

- a. In all circumstances
- b. only on good roads and in good weather conditions
- c. only on the highways

If two vehicles arrive at a four-way stop at about the same time which vehicle has the right-of-way?

- a. Neither vehicle has the right-of-way.
- b. The vehicle on the left shall yield to the vehicle on the right
- c. The vehicle on the right shall yield to the vehicle on the left

Stopping distance on snow or ice is increased ___ as compared to stopping on dry pavements.

- a. two times
- b. three to twelve times
- c. twenty times

To make a proper left turn on a four-lane highway, you must

- a. start in the right lane and end in the lane nearest the center lane
- b. start in the left lane and end in the lane closest to the side of the road
- c. start in the left lane and end in the lane closest to the center lane

Of all the safety equipment installed, which device is the greatest potential for saving lives?

- a. Headrests properly raised for the driver
- b. Safety belts
- c. Safety glass

Applicants must provide which means of identification to the examiner?

- a. Driver license from another state
- b. armed forces I.D. card
- c. Birth certificate (15 years and under)
- d. any of the above.

Parking is permitted ___.

- a. in front of a driveway.
- b. within 15 feet of a fire hydrant
- c. on the right side of the road not prohibited by a sign or a yellow line

To prevent "highway hypnosis" a driver should:

- a. stop every 100 miles or two hours.
- b. Open a window and drink coffee
- c. Play loud music

Only vehicles on necessary official business are permitted to follow within ___ feet of emergency vehicles on an emergency run.

- a. 500
- b. 2,500
- c. It is unlawful to follow an emergency vehicle.

In hydroplaning:

- a. The tire rides up on a film of water
- b. The tire travels on a level plane
- c. Friction is reduced about 50 percent

In transporting school children, the DEATH ZONE is:

- a. The route the bus travels
- b. The areas around the stopped school bus
- c. All railroad crossings

A simple precaution in avoiding carbon monoxide poisoning is:

- a. Idle the motor with all the windows closed tightly
- b. Warm up your motor in a closed garage
- c. Check you exhaust system regularly to prevent leaks

"Implied Consent" means:

- a. When a driver operates a motor vehicle on a public highway, it is deemed he has given consent to the chemical test if suspected of driving under the influence.
- b. Implies that he is qualified to drive any type motor vehicle upon a public highway
- c. Implies he will not drink and drive upon a highway of this state

Alcohol is a:

- a. Stimulant – It increases the reflexes and alertness
- b. Depressant – it slows normal reflexes and alertness
- c. Protein

In dense fog, the driver should:

- a. Keep the headlights on low beam and reduce speed
- b. Drive at variable speed, use high beams, prepare to stop quickly
- c. Drive at a constant speed, alternate use of high and low beams, drive partly on the shoulder

One of the reasons that freeways are the safest of all roads is that there is an absence of:

- a. cross traffic
- b. motorcycles
- c. fast-moving cars

Alabama's basic speed rule provides:

- a. You may drive at the maximum speed under any condition
- b. You may drive 55 m.p.h. in all urban districts
- c. Speed must be reasonable under existing conditions

Good posture at the steering wheel is important because:

- a. It results in better vision
- b. It allows you to grip the steering wheel tightly
- c. It enables you to drive with one hand on the steering wheel

Your driver license may be suspended if:

- a. You accumulate 8 points on your driving record
- b. You are a competent motor vehicle operator
- c. You are convicted of racing on the highway

When parking headed downhill, you should turn the front wheels:

- a. Straight ahead
- b. To the curb or road shoulder
- c. Away from the curb

If you miss your intended freeway exit, you should:

- a. Proceed to the next exit
- b. Back your vehicle with emergency signal light flashing
- c. Stop your vehicle and attempt to turn around

When making a right turn on a red signal light:

- a. The vehicle has the right of way
- b. The pedestrian has the right of way
- c. You must continue turning without stopping

Glare from oncoming headlights can be reduced by:

- a. Directing your vision to the right edge on the pavement
- b. Stare at the center line of the road
- c. Slow down while your eyes adjust

Failure to stop, render aid, or identify yourself in the event of an accident when personal injury is involved can result in the:

- a. Revocation of your drivers license.
- b. denial of the renewal of your license
- c. an additional 6 points being placed against your driving record

If you see a car coming toward you in your lane, you should:

- a. Pull to the left and increase speed
- b. Pull to the right and slow down
- c. Slow down and turn into the left lane

If a tire blows out, the driver should:

- a. Switch off the ignition
- b. Hold tightly to the steering wheel
- c. Brake hard

Should the headlights fall completely, the driver should first:

- a. Pull off the road
- b. Drive to the service station
- c. Slow down and try to keep the car on the pavement until speed is reduced

To pull out of a skid, a driver should:

- a. Press the brake pedal to the floor
- b. Turn the steering wheel in the direction that the rear of the car is skidding
- c. Not turn the steering wheel in either direction

Drivers hearing a siren or seeing the flashing red or blue lights of an emergency vehicle must pull over to the:

- a. Right lane and slow down
- b. Curb or side of the road
- c. Must reduce speed

When following a motorcyclist you should:

- a. Follow at a distance given any other vehicle
- b. increase your following distance
- c. Decrease your following distance

If you change your address, you must notify the Driver License Division:

- a. Within 30 days
- b. When your license is renewed
- c. Within 1 year

If you are driving in a wide lane and a motorcyclist is riding far to one side you should:

- a. Move into the same lane alongside the motorcycle
- b. Never move into the same lane alongside the motorcycle
- c. Blow your horn and pull alongside the motorcycle

State law required headlights be turned on:

- a. One-half hour after sunset to one-half hour before sunrise or when you cannot see clearly for 500 feet.
- b. Only when you cannot see clearly for 500 feet
- c. Only at night

When a driver's hand and arm are extended downward, he is signaling to:

- a. stop or slow down
- b. turn right
- c. turn left

If you must change lanes to pass or leave the freeway, you should FIRST:

- a. Check traffic carefully and signal well in advance of your move
- b. Pass on either the right or left lane by increasing your speed
- c. Increase your speed when exiting to clear traffic

A person carrying a white cane tipped with red usually means:

- a. The person is too old to walk without a cane
- b. The person is deaf
- c. The person is blind

In leaving a parallel parking space, the driver should:

- a. Look in the rearview mirror and over his shoulder
- b. Look in the rearview mirror
- c. Look over his shoulder only

The effect of mixing a drug and alcohol is:

- a. Greater than alcohol or drug used alone
- b. Equal to the one which has the most serious effect
- c. Equal to the average effect of the two

While under the stress of strong emotion, it is best:

- a. To let someone else drive
- b. To drive with a friend
- c. Not to think of other drivers

When parking on an upgrade with a curb:

- a. Turn the front edge of your front wheels to the curb
- b. Turn the back edge of your front wheels to the curb
- c. Keep your front wheels parallel to the curb

Which statement is true concerning railroad crossings?

- a. If the gates are down, stay in place and do not cross the tracks until they are raised.
- b. All vehicles must stop at railroad crossings regardless of the position of the gates
- c. A train can stop in a distance slightly longer than a tractor trailer

When passing a car on a two-lane highway, you should:

- a. Not return to the right lane until you see the vehicle you have just passed in your rearview mirror
- b. Blow your horn and pass on the right
- c. Return to your lane immediately and slow down

If a driver approaches a school bus displaying flashing red lights with an extended stop signal arm, he must:

- a. Stop only if he is behind the bus
- b. Stop only if he is meeting the bus
- c. Stop regardless of his direction of travel

When following another vehicle at night you should:

- a. Follow no closer than 500 feet
- b. Put on your emergency flashers
- c. Dim your headlights if you are within 200 feet of the vehicle ahead

What is the safest way to stop on ice?

- a. Take your foot off the accelerator
- b. apply hard, steady brake pressure
- c. apply the brakes gently

When entering a freeway:

- a. Enter the acceleration lane and increase your speed to match the vehicle in the thru lanes
- b. Move slowly into the lane of traffic
- c. Drive into a traffic lane immediately, because other traffic will move over for you

Alabama law states all automobiles must have:

- a. A?????????
- b. a regular foot brake only
- c. A regular foot brake and a parking brake

A skipped yellow center line dividing a two-lane road means:

- a. Passing permitted
- b. Passing not permitted
- c. ??????????????

A flashing circular red traffic light means:

- a. The same as a stop sign
- b. The same as a yield sign
- c. The same as a flashing yellow traffic light

If our car plunges into deep water, but does not sink, you should IMMEDIATELY:

- a. Open the door and summon help
- b. Get into the air area, breath deeply, and wait for the car to settle
- c. Escape through a window

The distance required to stop your car is important in determining:

- a. a safe driving speed
- b. A faster method of passing other vehicles
- c. Your signaling ability to other vehicles

When railroad gates are down

- a. Drive around the gates
- b. Cross the tracks at a slow speed
- c. Stay in place until the gates are raised

A driver involved in an accident is required to file an accident report with the Department of Public Safety when:

- a. No investigation of an accident is made
- b. When there is personal injury or damage to any vehicle or other property in the amount of \$250.00 or more
- c. You do not have liability insurance on your vehicle

The best precaution to take when driving with limited visibility is to:

- a. Reduce speed
- b. Try hydroplaning
- c. Increase speed

The stated minimum distance for signaling prior to a turning is:

- a. At least 100 feet
- b. At least 60 feet
- c. At least 25 feet

The regulatory sign to indicate speed limit is:

- a. Triangular in shape
- b. Circular in shape
- c. Rectangular in shape

Accident records show the greatest percentage of highway crashes are caused by:

- a. Alcohol
- b. Vehicle defects
- c. Driver error

When parking on an upgrade on a two-way street where there is no curb, leave your front wheels:

- a. Turned to the right
- b. Turned slightly to the left
- c. Facing straight ahead

For maximum effectiveness, a seat belt should:

- a. Be drawn snugly across the hip bones
- b. Fit snugly across the abdomen
- c. Fit loosely over the waist

A stop sign means:

- a. Slow down to 5 miles per hour
- b. Proceed cautiously if there is no traffic within a block
- c. Come to a complete stop

The formula now used in following another vehicle is:

- a. The two-second rule
- b. Two car lengths for every ten miles of travel
- c. One car length for every twenty miles of travel

Rear end collisions are the most common type of accident. They are caused by:

- a. High speed
- b. Improper brakes
- c. Following too close

If your right wheels get off the pavement on the rough shoulder of the road, you should:

- a. Make an emergency stop
- b. Stay on the shoulder, slow your speed, then return to the pavement
- c. Turn the steering wheel quickly to get back on the pavement